

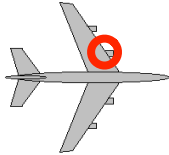
## Cycle 9 3rd Law

### 2 Naming Force Pairs A

For each situation, state the action and reaction pair & classify them.



SWIMMING  
Hand pushes



FLYING  
Jet engine pushes



DRIVING  
Tire pushes


WHICH PDO DID YOU GET?

Name the force pair for your PDO.

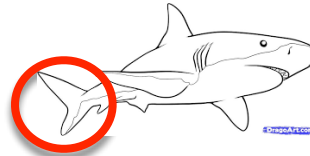
## Cycle 9 3rd Law

### 2 Naming Force Pairs B

For each situation, state the action and reaction pair & classify them.



TAKING OFF  
Wings push



SWIMMING  
Shark fins push



RUNNING  
Foot pushes

WHICH PDO DID YOU GET?

Name the force pair for your PDO.