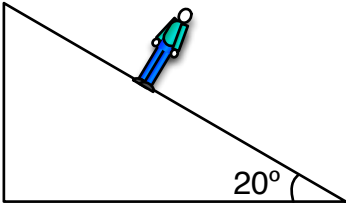
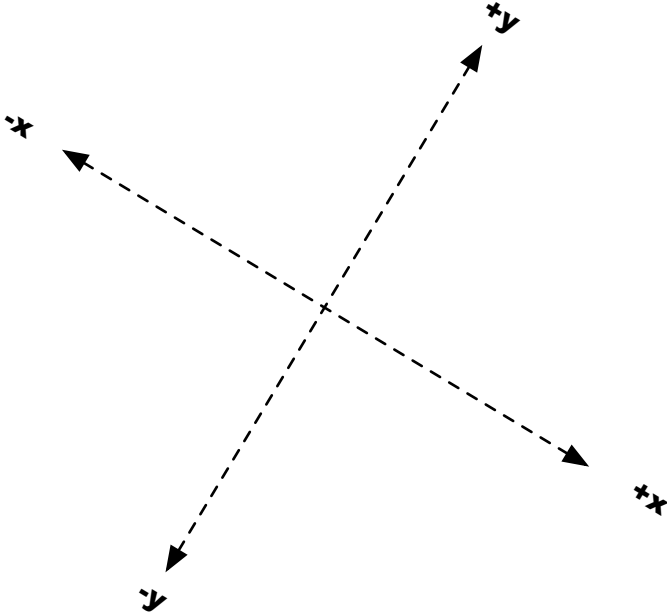


Cycle 9 Components - Ramps

Ramps A

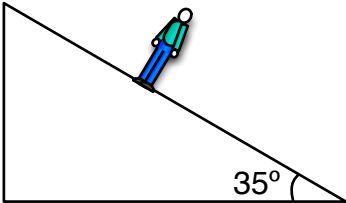


The 60 kg person is at rest and staying at rest. Solve for the Normal Force and Friction.



Cycle 9 Components - Ramps

Ramps B



The 70 kg person is at rest and staying at rest. Solve for the Normal Force and Friction.

