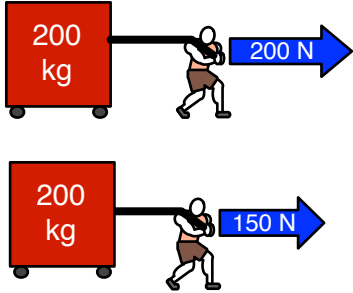


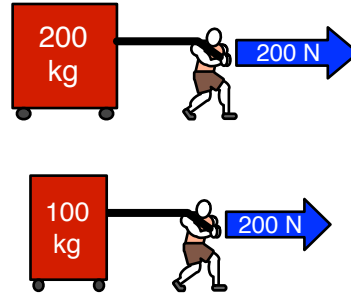
WHO GAINS SPEED QUICKEST?

In each situation, circle the one that changes speed the quickest.
HOW DO YOU KNOW?

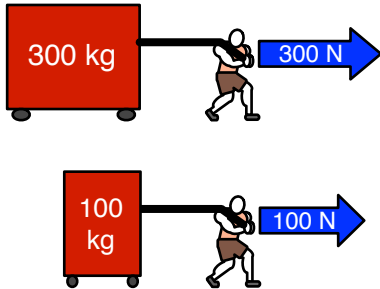
SITUATION #1



SITUATION #2



SITUATION #3



SITUATION #4

