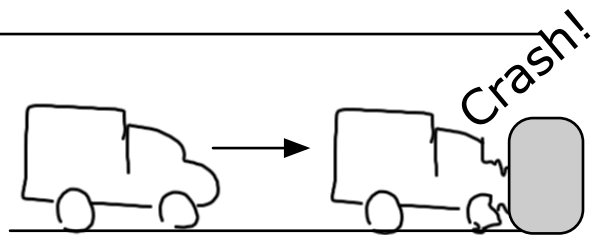


Corona Week 5 Impulse

2. Impulse - Change in Momentum

1. In this crash test, the 5,000 kg truck is initially moving at ___ m/s, to the right and is brought to a halt.

- Calculate the impulse delivered to the car.
- If the collision took 0.75 seconds, calculate the average force on the car.
- What impulse was delivered to the crash barrier?
- What was the average force on the crash barrier?

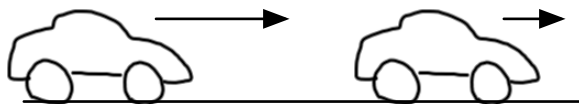


Choose a velocity between 10 m/s and 40 m/s where both digits are odd.

2. A toy catapult exerts an average force of 10 N on a 0.3 kg ball of clay for ___ s. If the clay starts from rest, what will its launch velocity be?

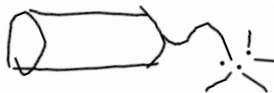
Choose a time less than one second with two non-zero decimal places.

3. Car brakes apply a constant force of _____ N to the left, bringing the velocity of the car from 20 m/s to 5 m/s in 3 seconds. Calculate the mass of the car.



Choose a force in the thousands that has all non-zero digits.

5. The firecracker explodes into two pieces. The 0.1 kg right hand piece is moving at 30 m/s to the right. What is the velocity of the 0.2 kg left hand piece?



Before



After